

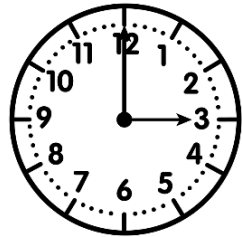
# Measures

CMI

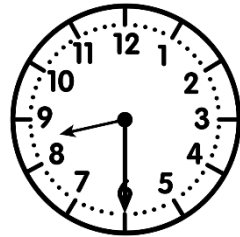
...../...../.....  
PRÉNOM : .....



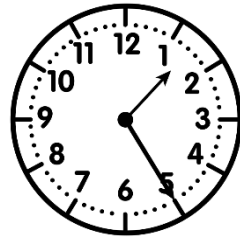
① Ecris l'heure sous chaque horloge.



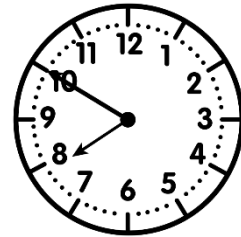
\_\_\_ h \_\_\_



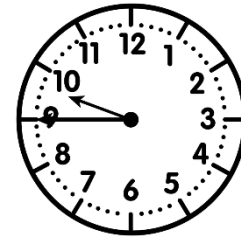
\_\_\_ h \_\_\_




\_\_\_ h \_\_\_



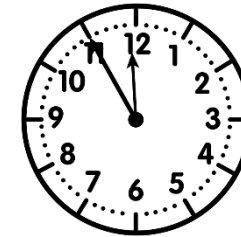
\_\_\_ h \_\_\_



\_\_\_ h \_\_\_



\_\_\_ h \_\_\_

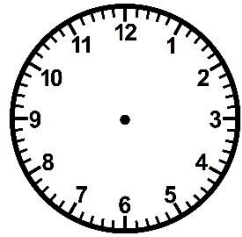



\_\_\_ h \_\_\_

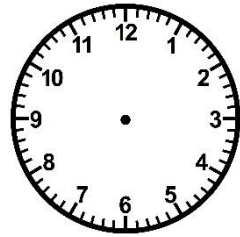


② Trace les aiguilles (rouge pour les heures, bleue pour les minutes).

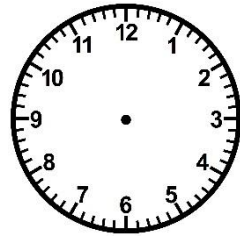
<https://laclassebleue.fr/>



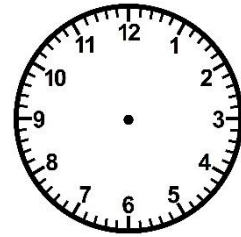
6 h 30



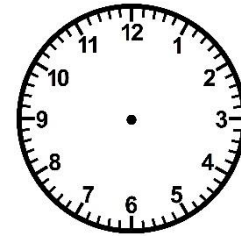
15 h 15




9 h 50



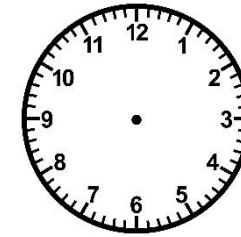
21 h 05



12 h 00



17 h 40



23 h 25

③ Complète ces égalités.

a)  $7\text{h } 45\text{min} + \underline{\hspace{2cm}} = 8\text{h}$   
b)  $3\text{h } 20\text{min} + \underline{\hspace{2cm}} = 4\text{h}$

c)  $10\text{h } 55\text{min} + \underline{\hspace{2cm}} = 11\text{h}$   
d)  $16\text{h } 30\text{min} + \underline{\hspace{2cm}} = 17\text{h}$   
e)  $23\text{h } 15\text{min} + \underline{\hspace{2cm}} = 0\text{h}$

f)  $12\text{h } 10\text{min} + \underline{\hspace{2cm}} = 13\text{h}$   
g)  $21\text{h } 50\text{min} + \underline{\hspace{2cm}} = 22\text{h}$   
h)  $9\text{h } 40\text{min} + \underline{\hspace{2cm}} = 10\text{h}$


# Measures

CMI

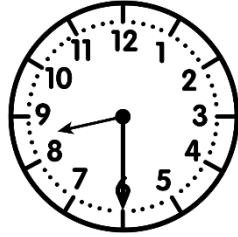
...../...../.....  
PRÉNOM : .....



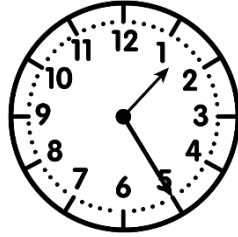
① Ecris l'heure sous chaque horloge.



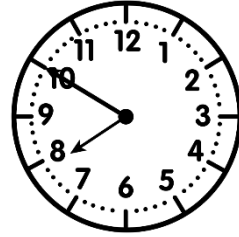
h h



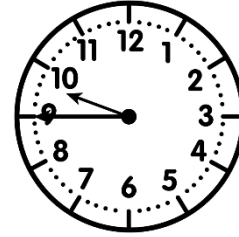
h h




h h




h h



h h



h h

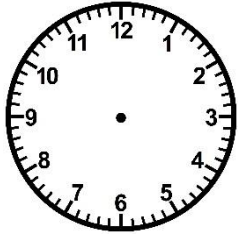



h h

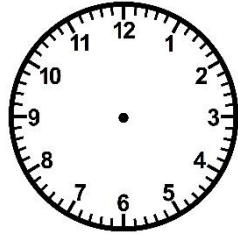


② Trace les aiguilles (rouge pour les heures, bleue pour les minutes).

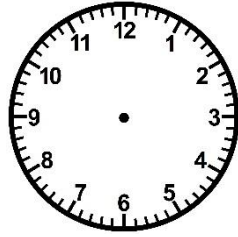
<https://laclassebleue.fr/>



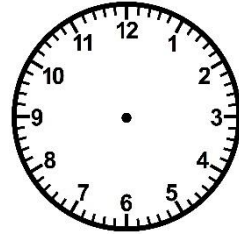
6 h 30



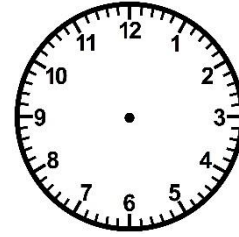
15 h 15



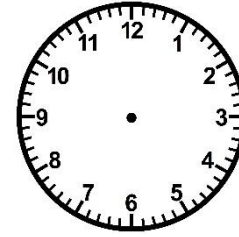
9 h 50




21 h 05



12 h 00



17 h 40



23 h 25

③ Complete ces égalités.

a)  $7\text{h } 45\text{min} + \underline{\hspace{2cm}} = 8\text{h}$   
b)  $3\text{h } 20\text{min} + \underline{\hspace{2cm}} = 4\text{h}$

c)  $10\text{h } 55\text{min} + \underline{\hspace{2cm}} = 11\text{h}$   
d)  $16\text{h } 30\text{min} + \underline{\hspace{2cm}} = 17\text{h}$   
e)  $23\text{h } 15\text{min} + \underline{\hspace{2cm}} = 0\text{h}$

f)  $12\text{h } 10\text{min} + \underline{\hspace{2cm}} = 13\text{h}$   
g)  $21\text{h } 50\text{min} + \underline{\hspace{2cm}} = 22\text{h}$   
h)  $9\text{h } 40\text{min} + \underline{\hspace{2cm}} = 10\text{h}$

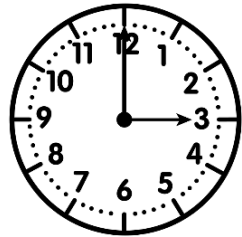
# Measures

CMI

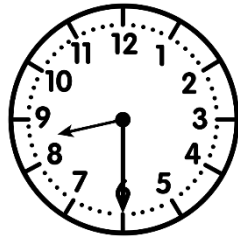
...../...../.....  
 PRÉNOM : .....



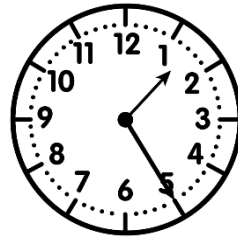
① Ecris l'heure sous chaque horloge.



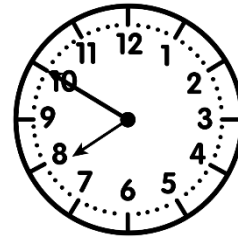
3h00 15h00



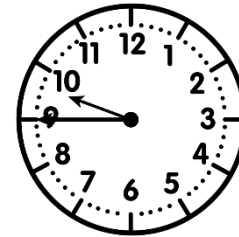
8h30 20h30




1h25 13h25




7h50 19h50



9h45 21h45



5h20 17h20

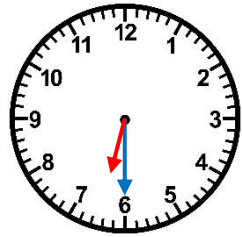


11h55 23h55

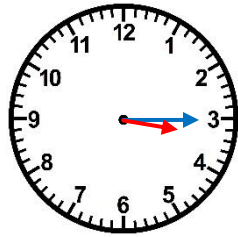


② Trace les aiguilles (rouge pour les heures, bleue pour les minutes).

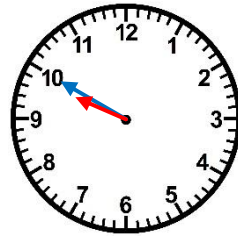
<https://laclassbleue.fr/>



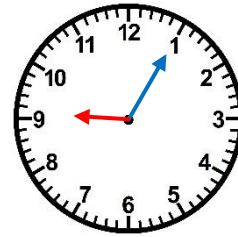
6 h 30



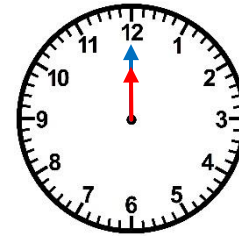
15 h 15



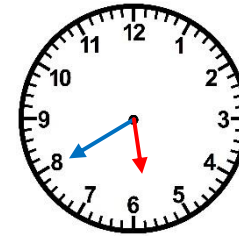
9 h 50



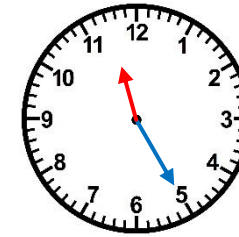
21 h 05



12 h 00



17 h 40



23 h 25

③ Complete ces égalités.

a) 7h45min + 15 min = 8h  
 b) 3h20min + 40 min = 4h

c) 10h55min + 5 min = 11h  
 d) 16h30min + 30 min = 17h  
 e) 23h15min + 45 min = 0h

f) 12h10min + 50 min = 13h  
 g) 21h50min + 10 min = 22h  
 h) 9h40min + 20 min = 10h

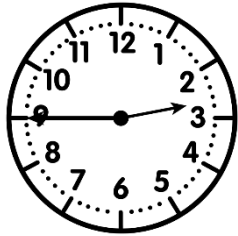
# Measures



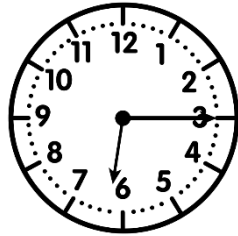
...../...../.....  
PRÉNOM : .....



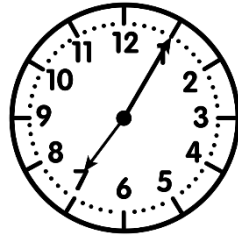
① Ecris l'heure sous chaque horloge.



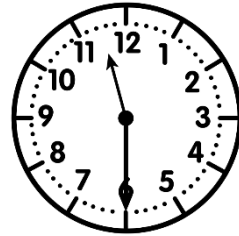
\_\_\_ h \_\_\_



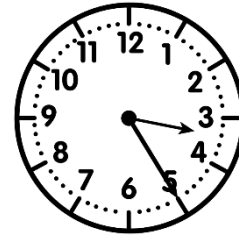
\_\_\_ h \_\_\_




\_\_\_ h \_\_\_




\_\_\_ h \_\_\_



\_\_\_ h \_\_\_



\_\_\_ h \_\_\_

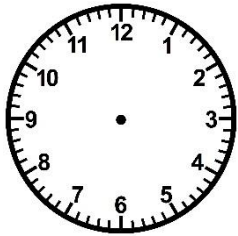


\_\_\_ h \_\_\_

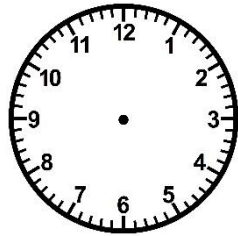


② Trace les aiguilles (rouge pour les heures, bleue pour les minutes).

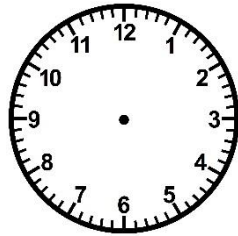
<https://laclassebleue.fr/>



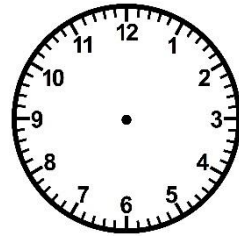
11 h 50



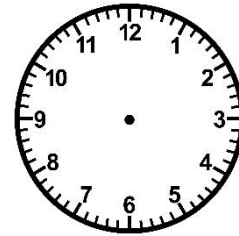
16 h 20



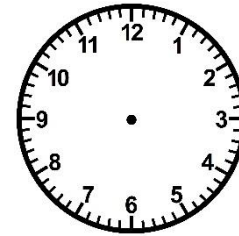
20 h 45



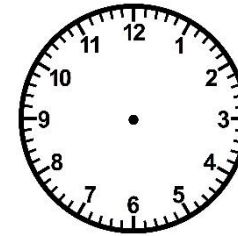
8 h 35



3 h 40



13 h 05



10 h 30



③ Complete ces égalités.

a)  $4\text{h } 37\text{min} + \underline{\hspace{2cm}} = 5\text{h}$

b)  $9\text{h } 56\text{min} + \underline{\hspace{2cm}} = 10\text{h}$

c)  $6\text{h } 23\text{min} + \underline{\hspace{2cm}} = 7\text{h}$

d)  $17\text{h } 50\text{min} + \underline{\hspace{2cm}} = 18\text{h}$

e)  $21\text{h } 05\text{min} + \underline{\hspace{2cm}} = 22\text{h}$

f)  $8\text{h } 16\text{min} + \underline{\hspace{2cm}} = 9\text{h}$

g)  $23\text{h } 45\text{min} + \underline{\hspace{2cm}} = 0\text{h}$

h)  $7\text{h } 40\text{min} + \underline{\hspace{2cm}} = 8\text{h}$

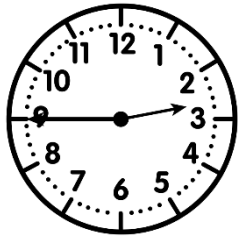
# Measures



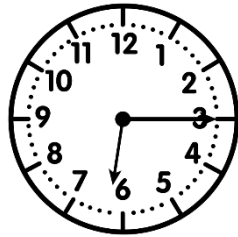
...../...../.....  
PRÉNOM : .....



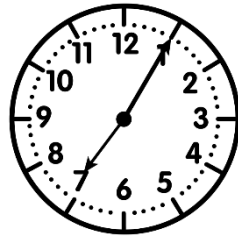
① Ecris l'heure sous chaque horloge.



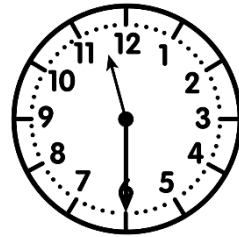
h h



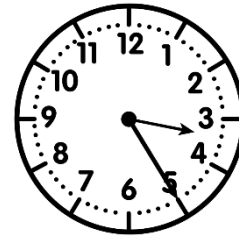
h h




h h




h h



h h



h h

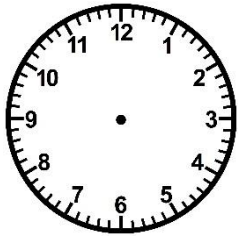


h h

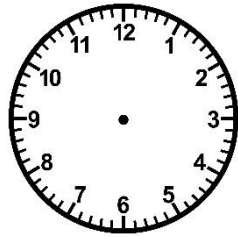


② Trace les aiguilles (rouge pour les heures, bleue pour les minutes).

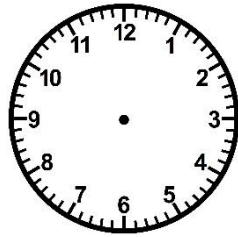
<https://laclassebleue.fr/>



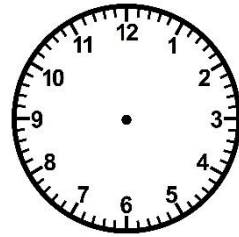
11 h 50



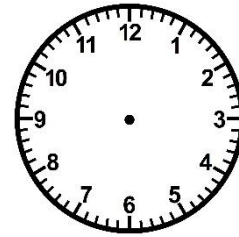
16 h 20




20 h 45



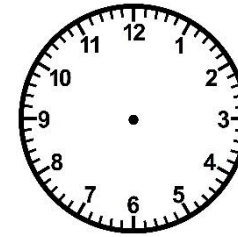
8 h 35



3 h 40



13 h 05



10 h 30



③ Complete ces égalités.

a)  $4\text{h } 37\text{min} + \underline{\hspace{2cm}} = 5\text{h}$

b)  $9\text{h } 56\text{min} + \underline{\hspace{2cm}} = 10\text{h}$

c)  $6\text{h } 23\text{min} + \underline{\hspace{2cm}} = 7\text{h}$

d)  $17\text{h } 50\text{min} + \underline{\hspace{2cm}} = 18\text{h}$

e)  $21\text{h } 05\text{min} + \underline{\hspace{2cm}} = 22\text{h}$

f)  $8\text{h } 16\text{min} + \underline{\hspace{2cm}} = 9\text{h}$

g)  $23\text{h } 45\text{min} + \underline{\hspace{2cm}} = 0\text{h}$

h)  $7\text{h } 40\text{min} + \underline{\hspace{2cm}} = 8\text{h}$

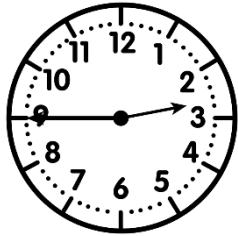
# Measures

CMI

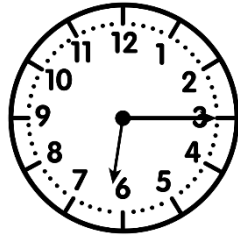
...../...../.....  
 PRÉNOM : .....



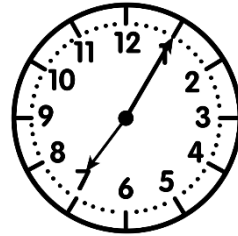
① Écris l'heure sous chaque horloge.



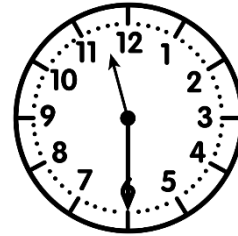
2h45 14h45




6h15 18h15



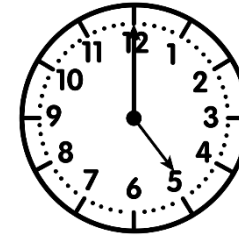
7h05 19h05



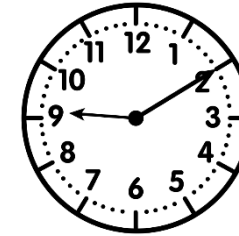
11h30 23h30



3h25 15h25



5h00 17h00

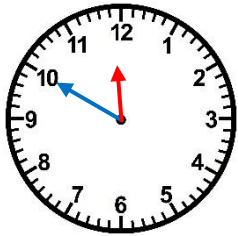


9h10 21h10

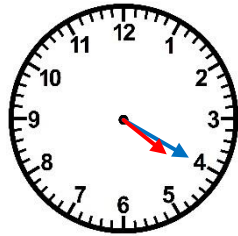


② Trace les aiguilles (rouge pour les heures, bleue pour les minutes).

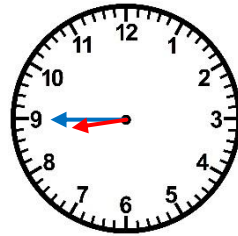
<https://laclassebleue.fr/>



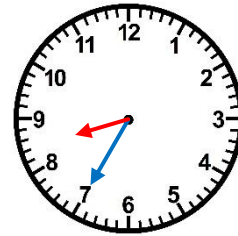
11 h 50



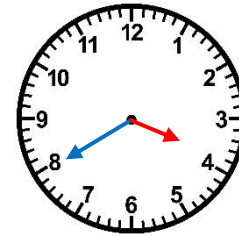
16 h 20



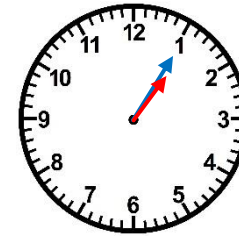
20 h 45



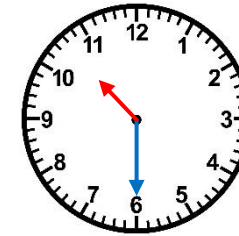
8 h 35



3 h 40



13 h 05



10 h 30



③ Complète ces égalités.

a)  $4\text{h } 37\text{min} + 23\text{min} = 5\text{h}$   
 b)  $9\text{h } 56\text{min} + 4\text{min} = 10\text{h}$

c)  $6\text{h } 23\text{min} + 37\text{min} = 7\text{h}$

d)  $17\text{h } 50\text{min} + 10\text{min} = 18\text{h}$

e)  $21\text{h } 05\text{min} + 55\text{min} = 22\text{h}$

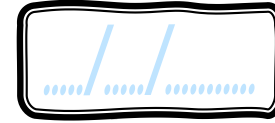
f)  $8\text{h } 16\text{min} + 44\text{min} = 9\text{h}$

g)  $23\text{h } 45\text{min} + 15\text{min} = 0\text{h}$

h)  $7\text{h } 40\text{min} + 20\text{min} = 8\text{h}$

# Measures

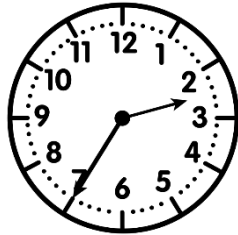

CMI



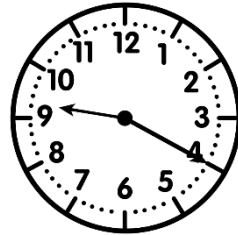
PRÉNOM : .....



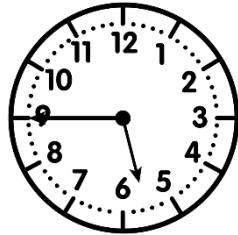
① Ecris l'heure sous chaque horloge.



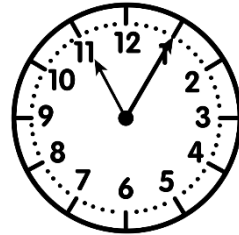
\_\_\_ h \_\_\_



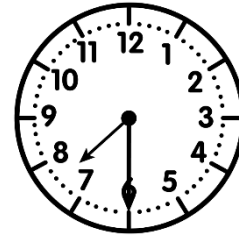
\_\_\_ h \_\_\_



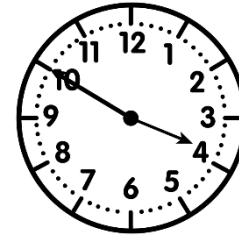
\_\_\_ h \_\_\_



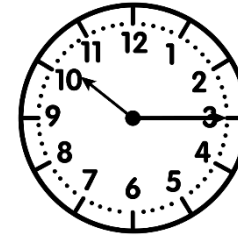
\_\_\_ h \_\_\_



\_\_\_ h \_\_\_



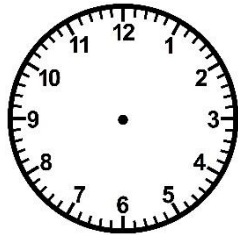

\_\_\_ h \_\_\_



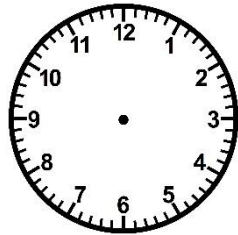
\_\_\_ h \_\_\_

② Trace les aiguilles (rouge pour les heures, bleue pour les minutes).

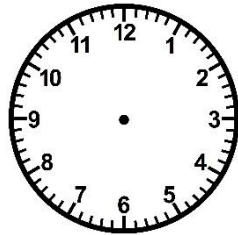
<https://laclassebleue.fr/>



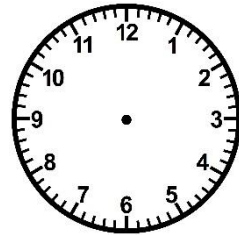
17 h 30



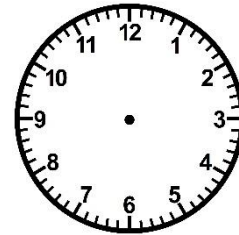
8 h 10



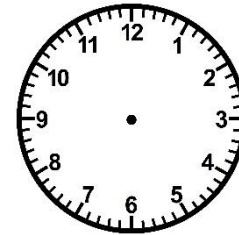
12 h 05



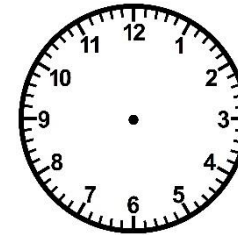
4 h 55



2 h 00



10 h 40



19 h 25

③ Colorie de la même couleur les heures équivalentes.

23 h 15

16 h 45

9 h 30

neuf heures et demie

4 h 45

21 h 30

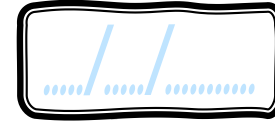
vingt-trois heures et quart

11 h 15

cinq heures moins le quart

# Meures

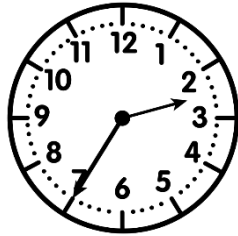

CMI



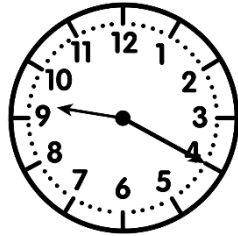
PRÉNOM : .....



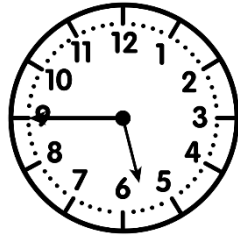
① Ecris l'heure sous chaque horloge.



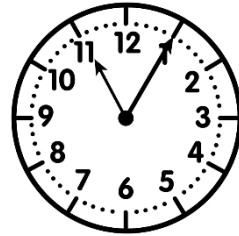
h h



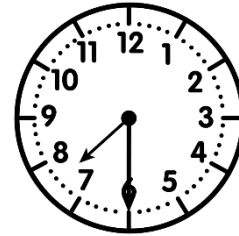
h h




h h



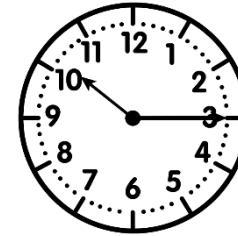
h h



h h



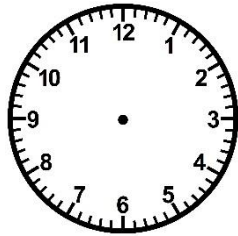

h h



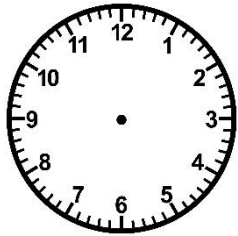
h h

② Trace les aiguilles (rouge pour les heures, bleue pour les minutes).

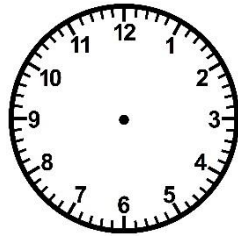
<https://laclassebleue.fr/>



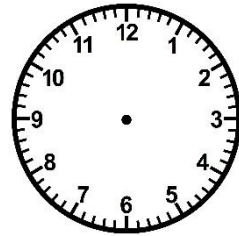
17 h 30



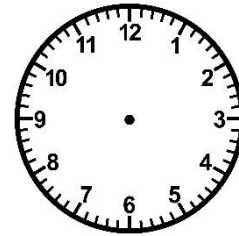
8 h 10



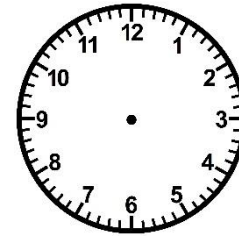
12 h 05



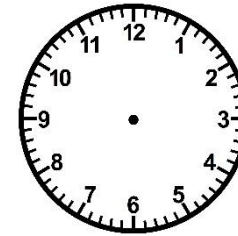
4 h 55



2 h 00



10 h 40



19 h 25

③ Colorie de la même couleur les heures équivalentes.

23 h 15

16 h 45

9 h 30

neuf heures et demie

4 h 45

21 h 30

vingt-trois heures et quart

11 h 15

cinq heures moins le quart





# Measures

CMI

...../...../.....  
PRÉNOM : .....

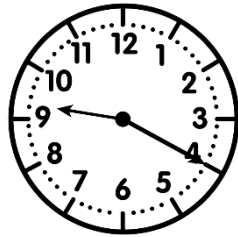


① Écris l'heure sous chaque horloge.



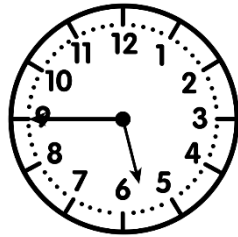
2h35

14h35



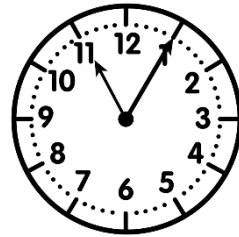
9h20

21h20



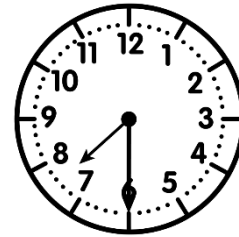
5h45

17h45



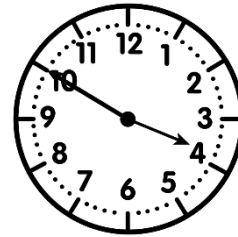
11h05

23h05



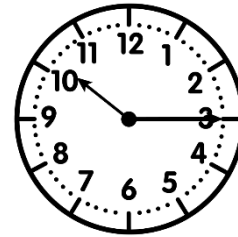
7h30

19h30



3h50

15h50

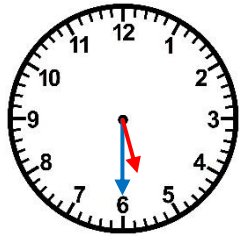


10h15

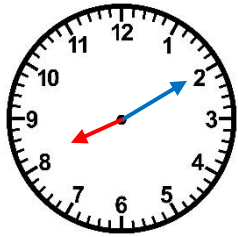
22h15

② Trace les aiguilles (rouge pour les heures, bleu pour les minutes).

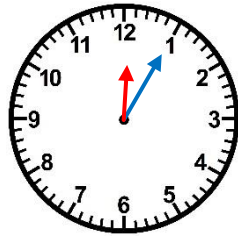
<https://laclassebleue.fr/>



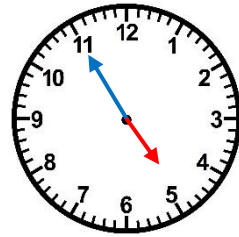
17 h 30



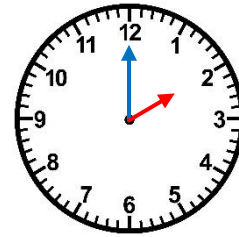
8 h 10



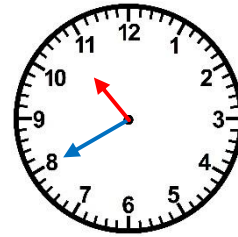
12 h 05



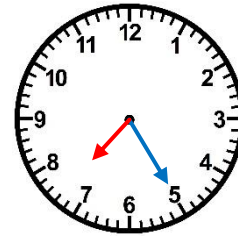
4 h 55



2 h 00



10 h 40



19 h 25

③ Colorie de la même couleur les heures équivalentes.

23 h 15

16 h 45

9 h 30

neuf heures et demie

4 h 45

21 h 30

11 h 15

vingt-trois heures et quart


cinq heures moins le quart

# Meurea





..... / ..... / .....

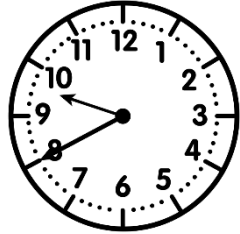
PRÉNOM : .....



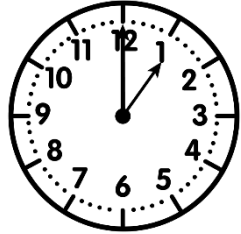
① Ecris l'heure sous chaque horloge.



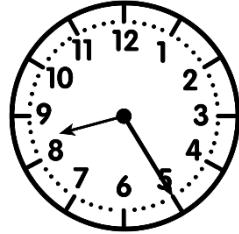
\_\_\_ h \_\_\_




\_\_\_ h \_\_\_



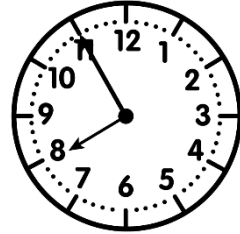
\_\_\_ h \_\_\_



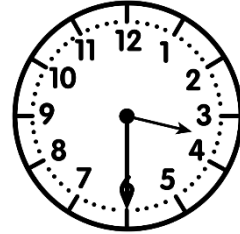
\_\_\_ h \_\_\_



\_\_\_ h \_\_\_



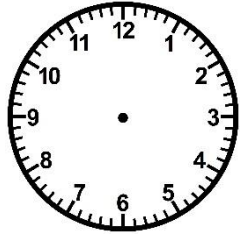

\_\_\_ h \_\_\_



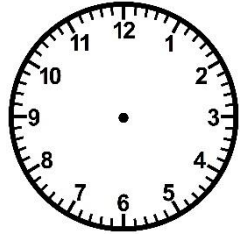
\_\_\_ h \_\_\_

② Trace les aiguilles (rouge pour les heures, bleue pour les minutes).

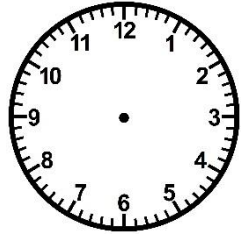
<https://laclassbleue.fr/>



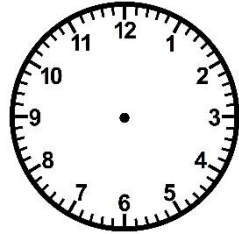
0 h 25



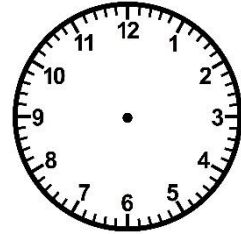
9 h 00



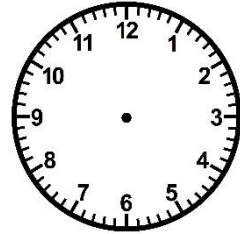
5 h 50



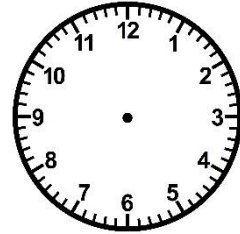
16 h 15



18 h 00




22 h 35



11 h 45

③ Résous ce problème.

Il est 16h50. Rose et Toby se rendent au cinéma, mais la projection commence avec une demie heure de retard. À quelle heure la séance commence-t-elle ?




# Meurea



CMI

..... / ..... / .....

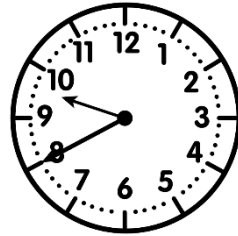
PRÉNOM : .....




① Ecris l'heure sous chaque horloge.



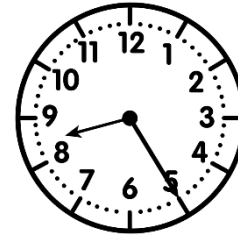
h h




h h



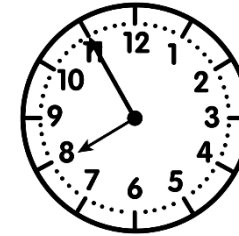
h h



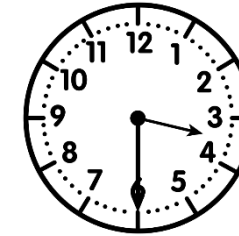
h h



h h



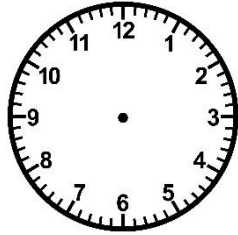

h h



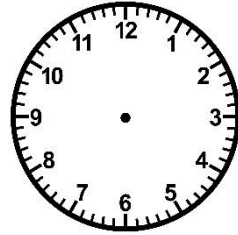
h h

② Trace les aiguilles (rouge pour les heures, bleue pour les minutes).

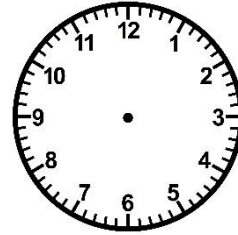
<https://laclassebleue.fr/>




0 h 25




9 h 00




5 h 50




16 h 15



18 h 00




22 h 35



11 h 45

③ Résous ce problème.

Il est 16h50. Rose et Toby se rendent au cinéma, mais la projection commence avec une demie heure de retard. À quelle heure la séance commence-t-elle ?




Meurea/lire l'heure

# Meurea





..... / ..... / .....

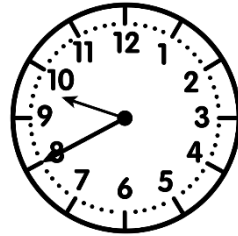
PRÉNOM : .....




① Ecris l'heure sous chaque horloge.



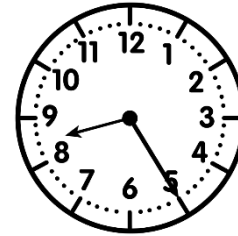
4h05 16h05




9h40 21h40



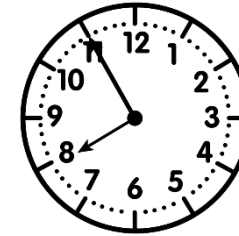
1h00 13h00



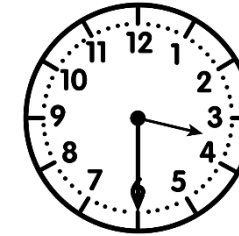
8h25 20h25



11h10 23h10



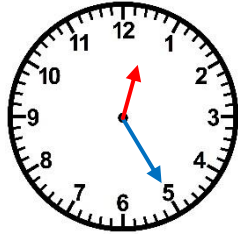

7h55 19h55



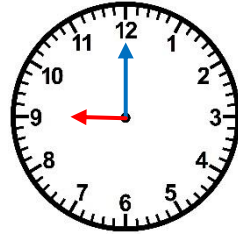
3h30 15h30

② Trace les aiguilles (rouge pour les heures, bleu pour les minutes).

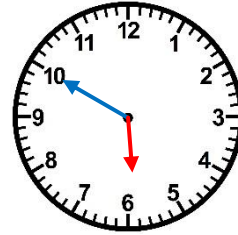
<https://laclassobleue.fr/>



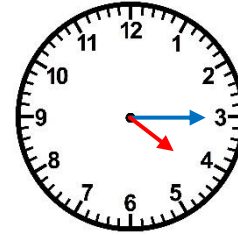
0 h 25



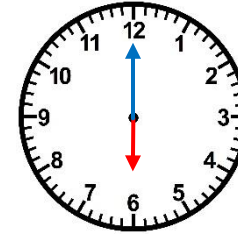
9 h 00



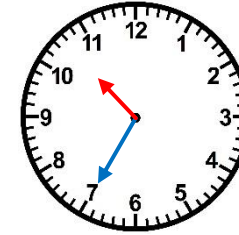
5 h 50



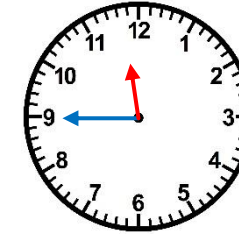
16 h 15



18 h 00




22 h 35



11 h 45

③ Résous ce problème.

Il est 16h50. Rose et Toby se rendent au cinéma, mais la projection commence avec une demie heure de retard. À quelle heure la séance commence-t-elle ?



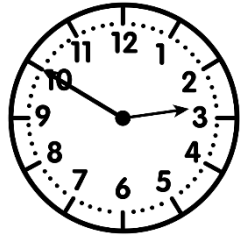
# Measures

CMI

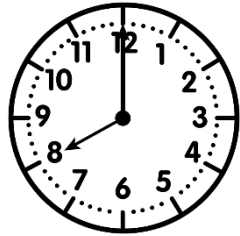
...../...../.....  
PRÉNOM : .....



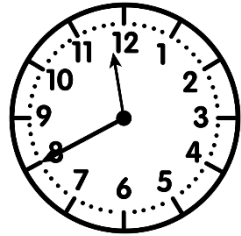
① Ecris l'heure sous chaque horloge.



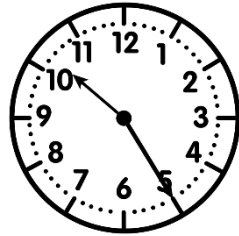
\_\_\_ h \_\_\_



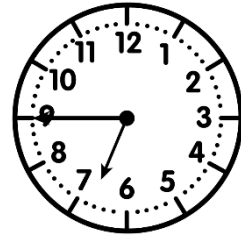
\_\_\_ h \_\_\_



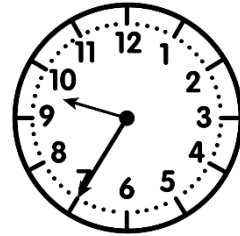
\_\_\_ h \_\_\_



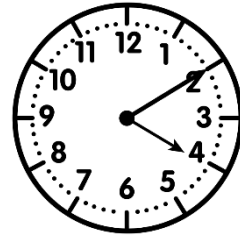
\_\_\_ h \_\_\_



\_\_\_ h \_\_\_



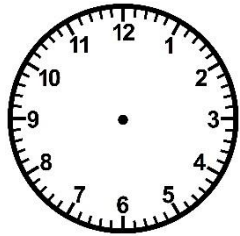
\_\_\_ h \_\_\_



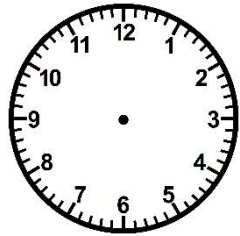
\_\_\_ h \_\_\_

② Trace les aiguilles (rouge pour les heures, bleue pour les minutes).

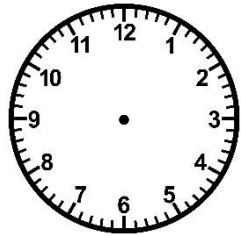
<https://laclassebleue.fr/>



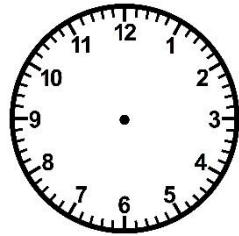
12 h 50



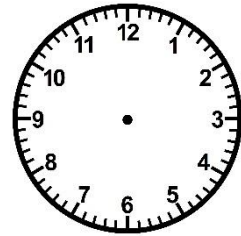
15 h 35



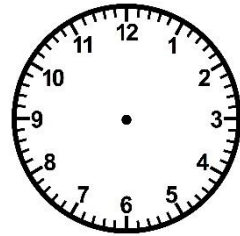
19 h 15



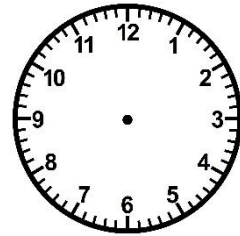
10 h 05



1 h 30



8 h 55



23 h 00

③ Complète ces égalités.

a) 2h 06 min + \_\_\_\_\_ = 3h

b) 9h 53 min + \_\_\_\_\_ = 10h

c) 15h 45 min + \_\_\_\_\_ = 16h

d) 20h 18 min + \_\_\_\_\_ = 21h

e) 22h 30 min + \_\_\_\_\_ = 23h

f) 6h 32 min + \_\_\_\_\_ = 7h

g) 17h 15 min + \_\_\_\_\_ = 18h

h) 8h 48 min + \_\_\_\_\_ = 9h

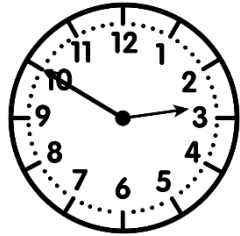
# Measures

CMI

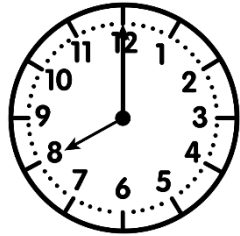
...../...../.....  
PRÉNOM : .....



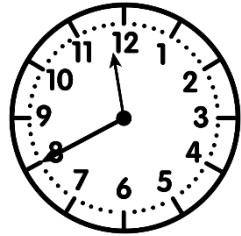
① Ecris l'heure sous chaque horloge.



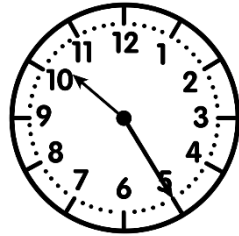
h h



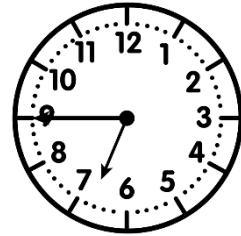
h h



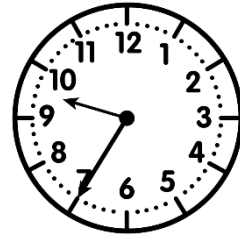
h h



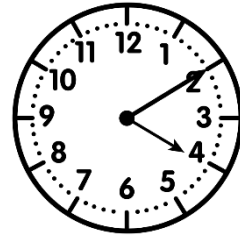
h h



h h



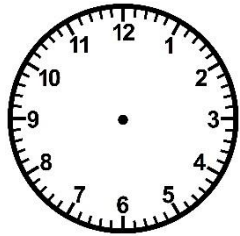
h h



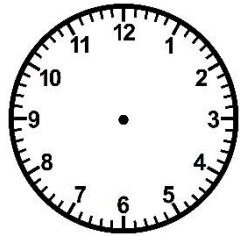
h h

② Trace les aiguilles (rouge pour les heures, bleue pour les minutes).

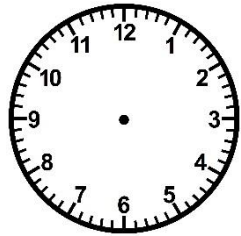
<https://laclassebleue.fr/>



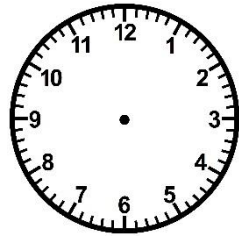
12 h 50



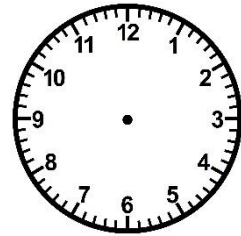
15 h 35



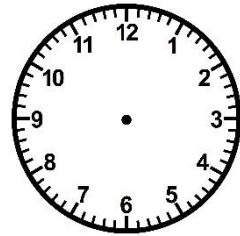
19 h 15



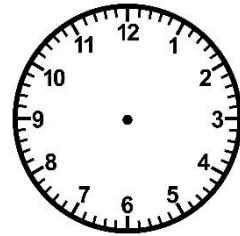
10 h 05



1 h 30



8 h 55



23 h 00

③ Complète ces égalités.

a) 2h 06 min + \_\_\_\_\_ = 3h

b) 9h 53 min + \_\_\_\_\_ = 10h

c) 15h 45 min + \_\_\_\_\_ = 16h

d) 20h 18 min + \_\_\_\_\_ = 21h

e) 22h 30 min + \_\_\_\_\_ = 23h

f) 6h 32 min + \_\_\_\_\_ = 7h

g) 17h 15 min + \_\_\_\_\_ = 18h

h) 8h 48 min + \_\_\_\_\_ = 9h

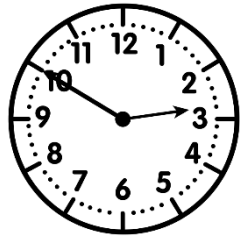
# Measures

CMI

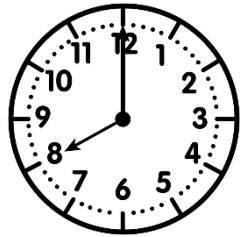
...../...../.....  
PRÉNOM : .....



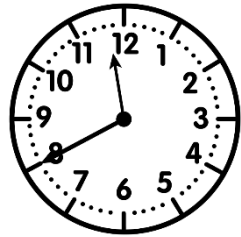
① Écris l'heure sous chaque horloge.



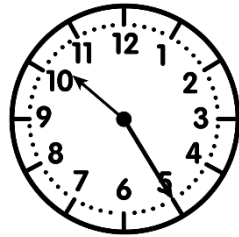
2h50 14h50



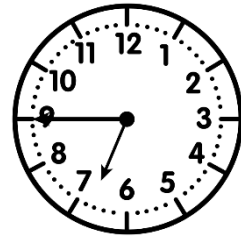
8h00 20h00



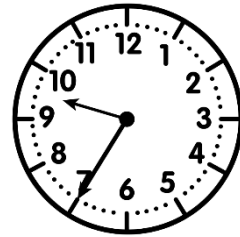
11h40 23h40



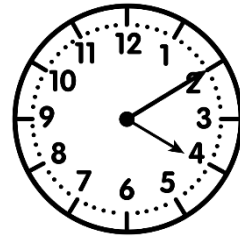
10h25 22h25



6h45 18h45



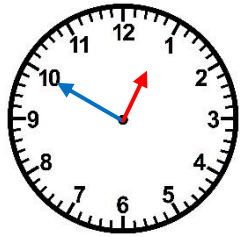
9h35 21h35



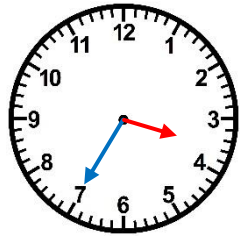
4h10 16h10

② Trace les aiguilles (rouge pour les heures, bleue pour les minutes).

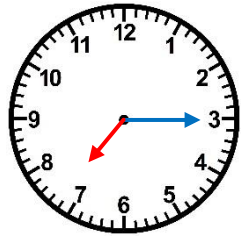
<https://laclassebleue.fr/>



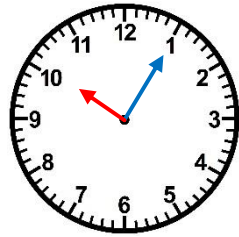
12 h 50



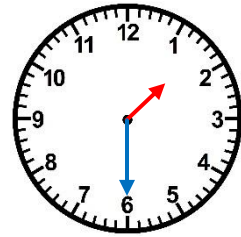
15 h 35



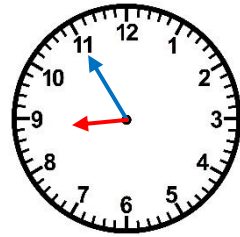
19 h 15



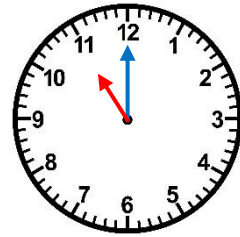
10 h 05



1 h 30



8 h 55



23 h 00

③ Complète ces égalités.

a)  $2\text{h}06\text{min} + 54\text{min} = 3\text{h}$   
b)  $9\text{h}53\text{min} + 7\text{min} = 10\text{h}$

c)  $15\text{h}45\text{min} + 15\text{min} = 16\text{h}$   
d)  $20\text{h}18\text{min} + 42\text{min} = 21\text{h}$   
e)  $22\text{h}30\text{min} + 30\text{min} = 23\text{h}$

f)  $6\text{h}32\text{min} + 28\text{min} = 7\text{h}$   
g)  $17\text{h}15\text{min} + 45\text{min} = 18\text{h}$   
h)  $8\text{h}48\text{min} + 12\text{min} = 9\text{h}$

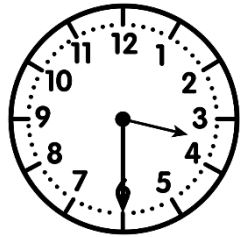
# Meures

CMI

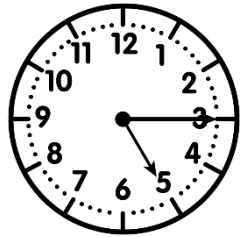
...../...../.....  
PRÉNOM : .....




① Ecris l'heure sous chaque horloge.



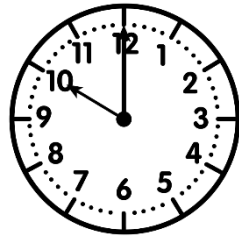
\_\_\_ h \_\_\_



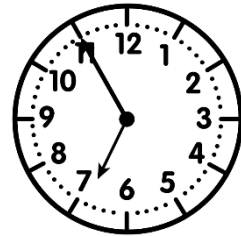
\_\_\_ h \_\_\_



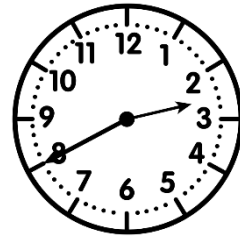
\_\_\_ h \_\_\_




\_\_\_ h \_\_\_



\_\_\_ h \_\_\_



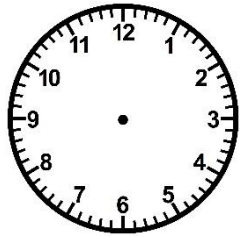
\_\_\_ h \_\_\_



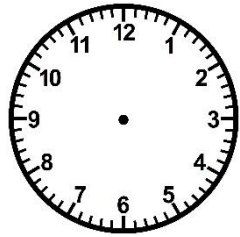
\_\_\_ h \_\_\_

② Trace les aiguilles (rouge pour les heures, bleue pour les minutes).

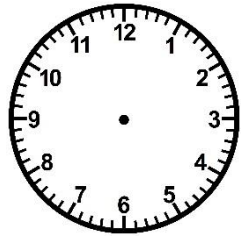
<https://laclassobleue.fr/>



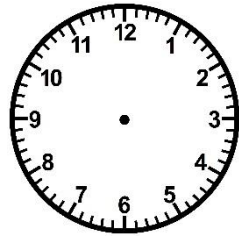
2 h 10



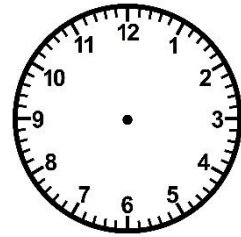
16 h 45



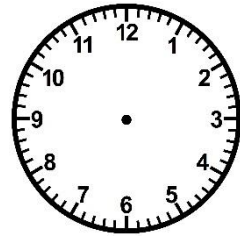
9 h 30



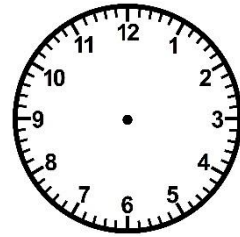
18 h 50



23 h 20



15 h 15



7 h 00



③ Colorie de la même couleur les heures équivalentes.

3 h 40

7 h 00

onze heures moins dix

10 h 50

quatre heures moins vingt

22 h 50

sept heures pile

19 h 00

15 h 40



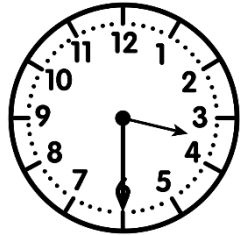
# Meures

CMI


...../...../.....  
PRÉNOM : .....




① Ecris l'heure sous chaque horloge.



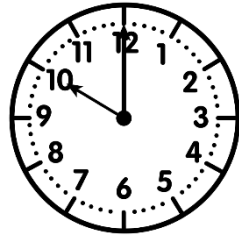
h h



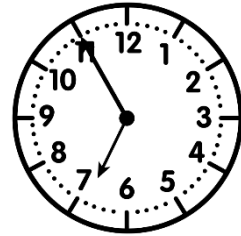
h h



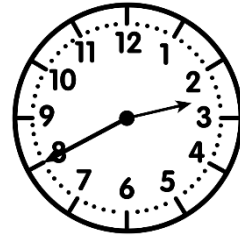
h h



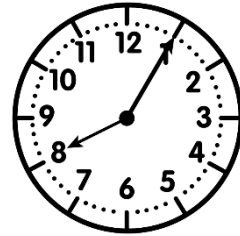
h h



h h



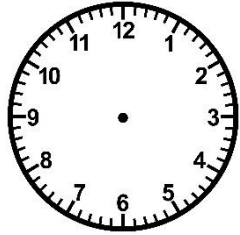
h h



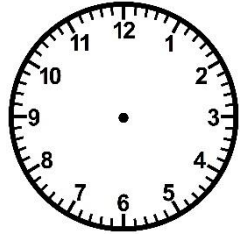
h h

② Trace les aiguilles (rouge pour les heures, bleue pour les minutes).

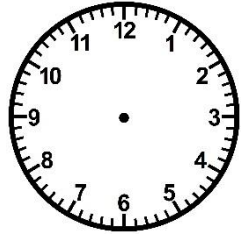
<https://laclassobleue.fr/>



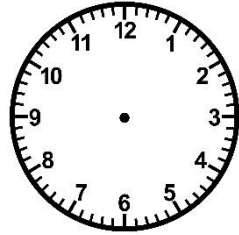
2 h 10



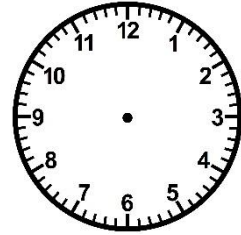
16 h 45



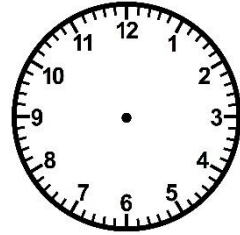
9 h 30



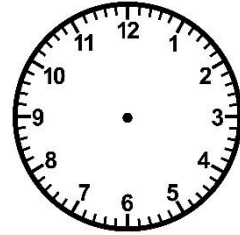
18 h 50



23 h 20



15 h 15



7 h 00

③ Colorie de la même couleur les heures équivalentes.

3 h 40

7 h 00

onze heures moins dix

10 h 50

quatre heures moins vingt

22 h 50

sept heures pile

19 h 00

15 h 40

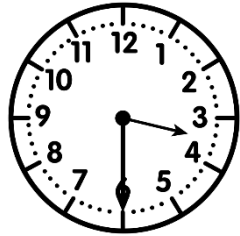
# Meurea

CMI


...../...../.....  
 PRÉNOM : .....




① Ecris l'heure sous chaque horloge.



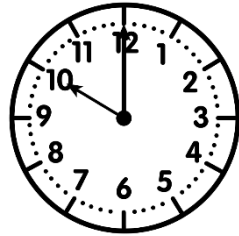
3h30 15h30



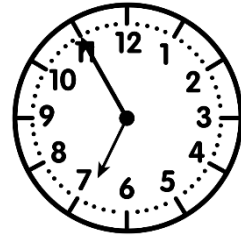
5h15 17h15



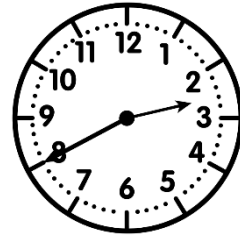
9h25 21h25



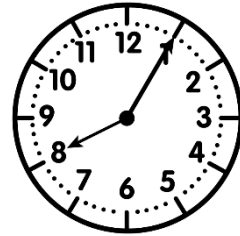
10h00 22h00



6h55 18h55



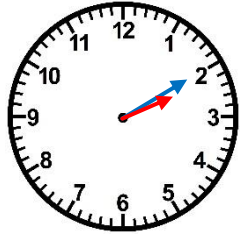
2h40 14h40



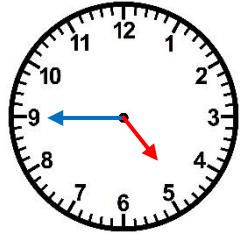
8h05 20h05

② Trace les aiguilles (rouge pour les heures, bleu pour les minutes).

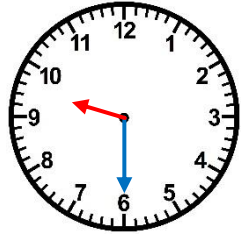
<https://laclassobleue.fr/>



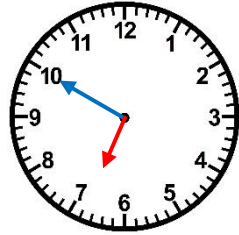
2 h 10



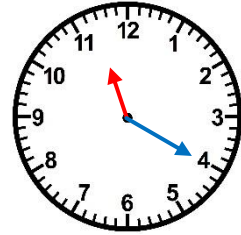
16 h 45



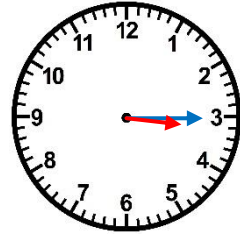
9 h 30



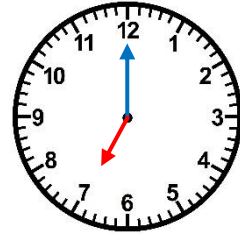
18 h 50



23 h 20



15 h 15



7 h 00

③ Colorie de la même couleur les heures équivalentes.

3 h 40

7 h 00

onze heures moins dix

10 h 50

quatre heures moins vingt

22 h 50

sept heures pile

19 h 00

15 h 40

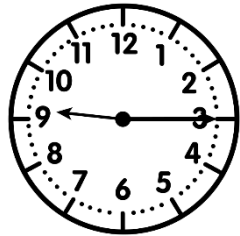
# Meurea



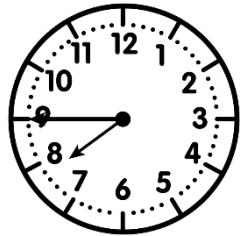
...../...../.....  
PRÉNOM : .....



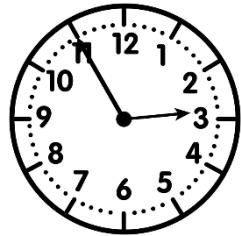
① Ecris l'heure sous chaque horloge.




\_\_\_ h \_\_\_




\_\_\_ h \_\_\_



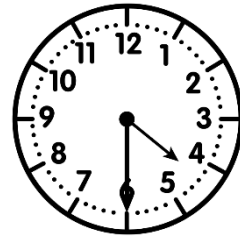
\_\_\_ h \_\_\_




\_\_\_ h \_\_\_



\_\_\_ h \_\_\_



\_\_\_ h \_\_\_

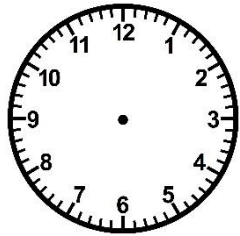



\_\_\_ h \_\_\_

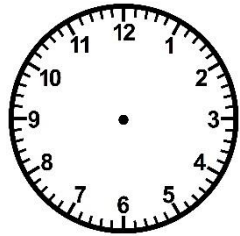


② Trace les aiguilles (rouge pour les heures, bleue pour les minutes).

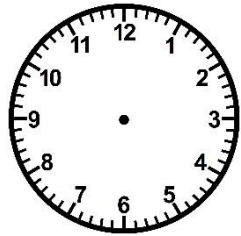
<https://laclassibleue.fr/>



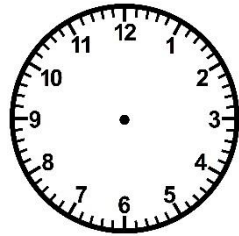
8 h 40



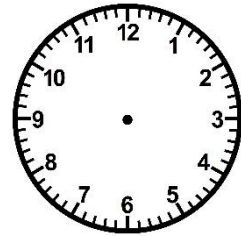
16 h 00



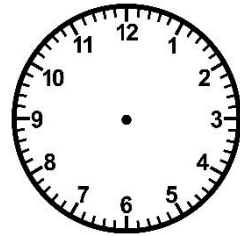
20 h 15



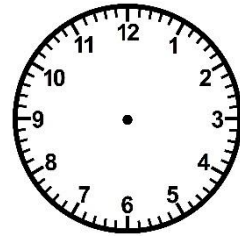
14 h 30



3 h 05



22 h 55



6 h 25

③ Résous ce problème.

Chloé a rendez-vous chez Louane à 17 h 00, mais elle arrive avec un quart d'heure d'avance. Quelle heure est-il ?



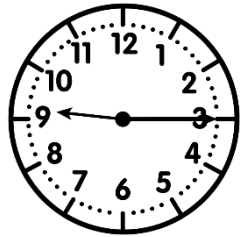
# Meurea



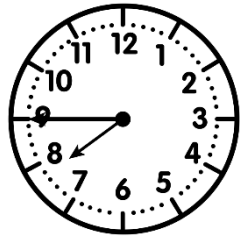
...../...../.....  
PRÉNOM : .....



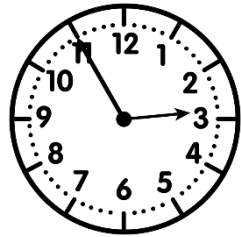
① Ecris l'heure sous chaque horloge.




h h




h h



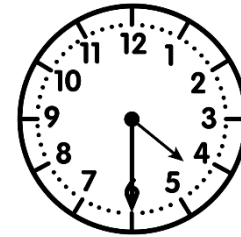
h h




h h



h h



h h

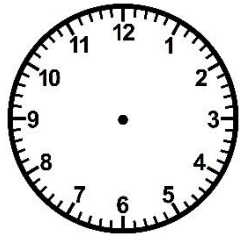



h h

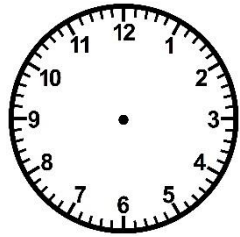


② Trace les aiguilles (rouge pour les heures, bleue pour les minutes).

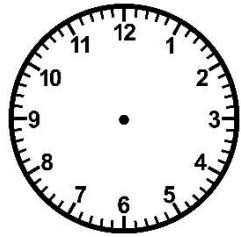
<https://laclassibleue.fr/>



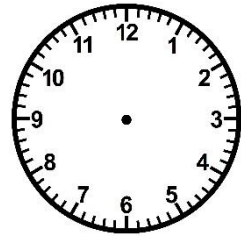
8 h 40



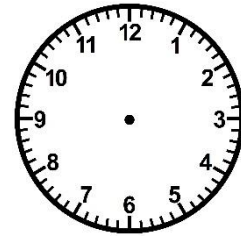
16 h 00



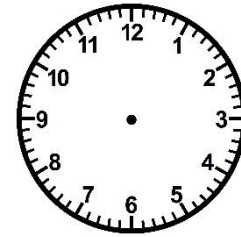
20 h 15



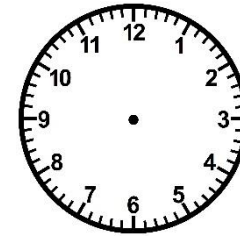
14 h 30



3 h 05



22 h 55



6 h 25

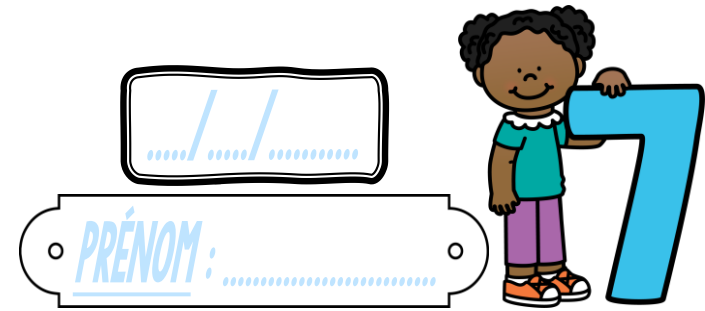
③ Résous ce problème.

Chloé a rendez-vous chez Louane à 17 h 00, mais elle arrive avec un quart d'heure d'avance. Quelle heure est-il ?

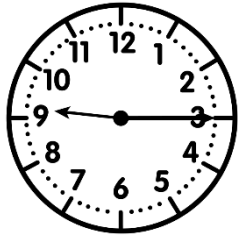


# Meurea

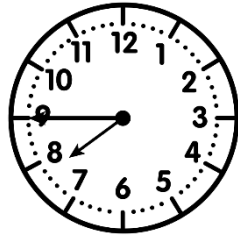
CMI



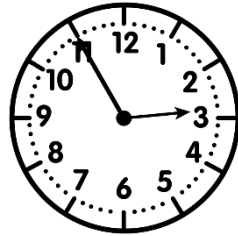
① Ecris l'heure sous chaque horloge.




9h15 21h15




7h45 19h45



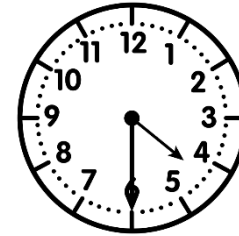
2h55 14h55




1h20 13h20



6h35 18h35



4h30 16h30

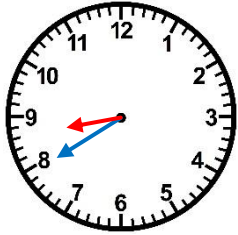


10h50 22h50

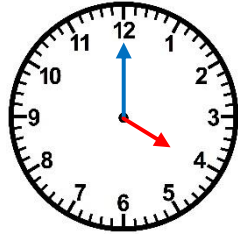


② Trace les aiguilles (rouge pour les heures, bleu pour les minutes).

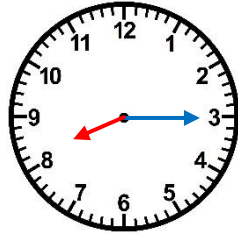
<https://laclassebleue.fr/>



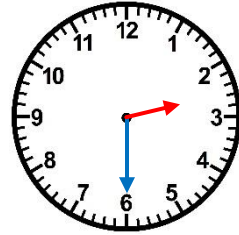
8 h 40



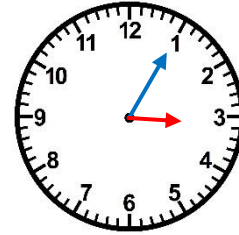
16 h 00



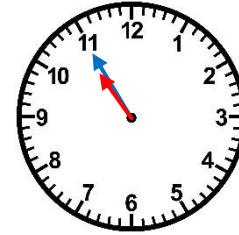
20 h 15



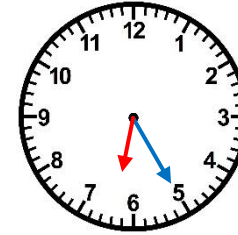
14 h 30



3 h 05



22 h 55



6 h 25

③ Résous ce problème.

Chloé a rendez-vous chez Louane à 17 h 00, mais elle arrive avec un quart d'heure d'avance. Quelle heure est-il ?

