


Name :

TIME FACTS

① Match the time facts. Draw lines.

Hours in a day	12
Days of the week	10
Months of the year	52
Years in a decade	24
Weeks in a year	7

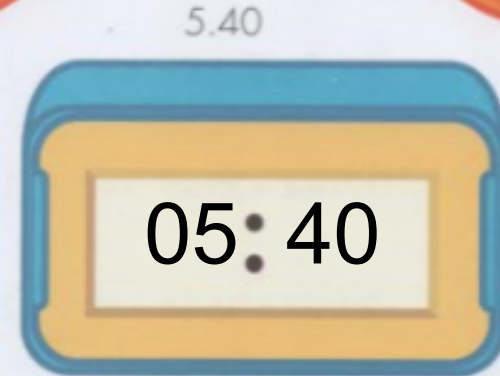
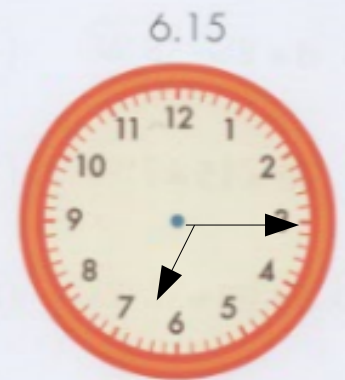
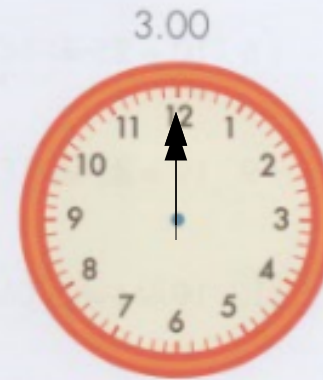
② Circle the clock that says 8.30.



③ How many minutes are there in 1 hour?

60

④ Show these times on the clocks.



⑤ The station clock says 2.20. The train arrives at 2.30. How long do the passengers have to wait?

10 minutes