



1 Observe et nomme ces différents solides.








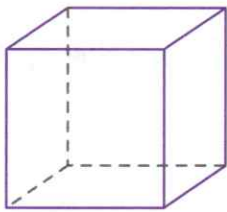




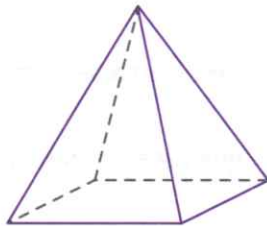




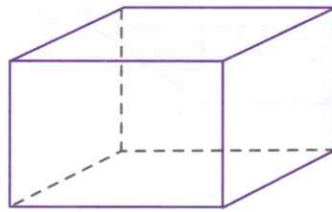

2 Observe ces polyèdres et complète le tableau.



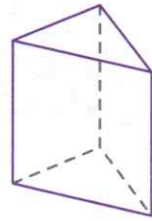
A



B



C



D

	Nom du polyèdre	Nombre de faces	Forme des faces	Nombre de sommets	Nombre d'arêtes
A					
B					
C					
D					

