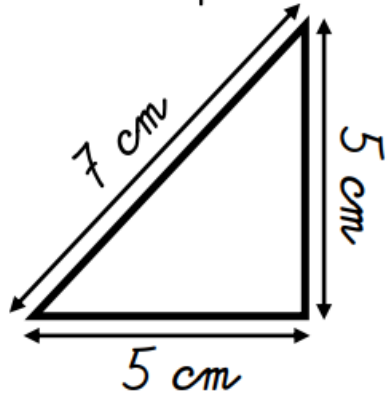
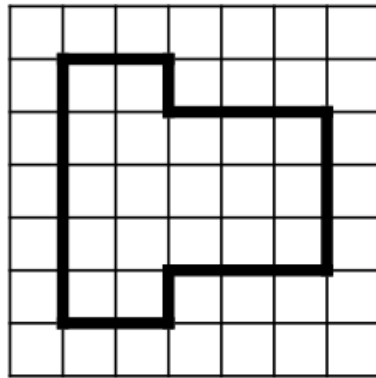


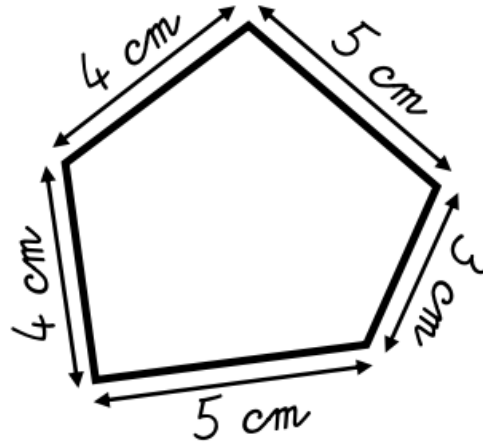
1/ Calcule le périmètre de ces polygones.



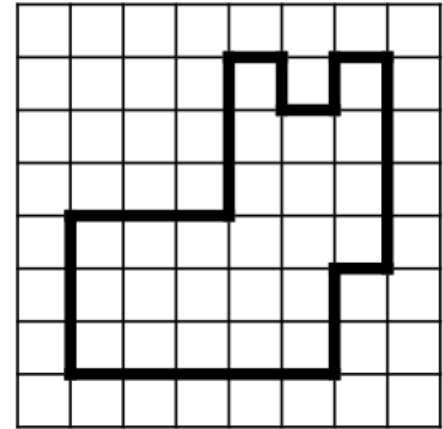
$P =$ _____
 $P =$ _____ cm



$P =$ _____
 $P =$ _____ carreaux

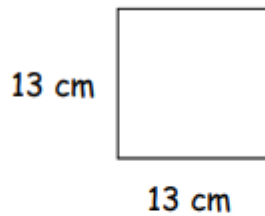


$P =$ _____
 $P =$ _____ cm

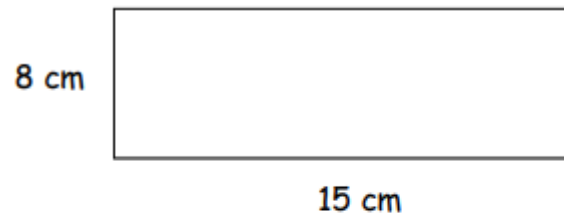


$P =$ _____
 $P =$ _____ carreaux

2/ Calcule le périmètre de ce carré et ce rectangle.



Périmètre = _____



Périmètre = _____

